

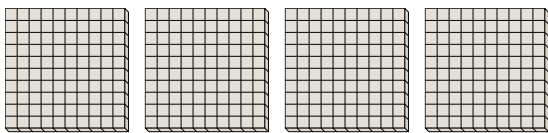


Use the groups to answer each question.

Answers

1) a. How many groups of 100 are there?

b. How many small blocks are there total?

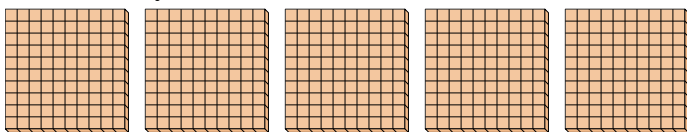


1a. _____

1b. _____

2) a. How many groups of 100 are there?

b. How many small blocks are there total?




2a. _____

2b. _____

3) a. How many groups of 100 are there?

b. How many small blocks are there total?




3a. _____

3b. _____

4) a. How many groups of 100 are there?

b. How many small blocks are there total?



4a. _____


4b. _____

5a. _____

5b. _____

5) a. How many groups of 100 are there?

b. How many small blocks are there total?



6a. _____

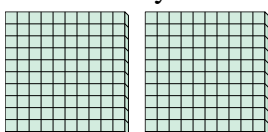
6b. _____

7a. _____

7b. _____

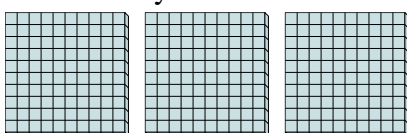
6) a. How many groups of 100 are there?

b. How many small blocks are there total?



7) a. How many groups of 100 are there?

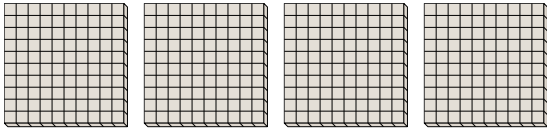
b. How many small blocks are there total?



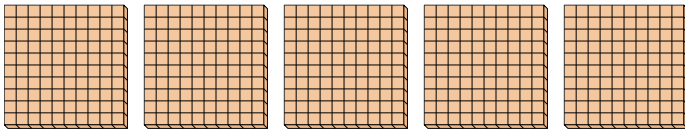


Use the groups to answer each question.


- 1) a. How many groups of 100 are there?
b. How many small blocks are there total?




- 2) a. How many groups of 100 are there?
b. How many small blocks are there total?



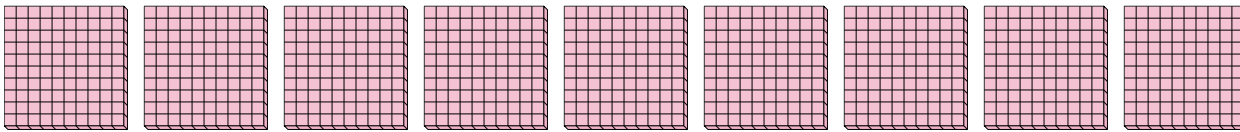
- 3) a. How many groups of 100 are there?
b. How many small blocks are there total?



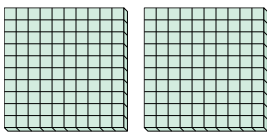
- 4) a. How many groups of 100 are there?
b. How many small blocks are there total?



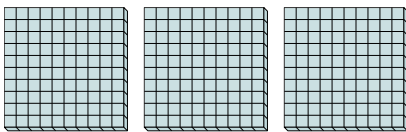
- 5) a. How many groups of 100 are there?
b. How many small blocks are there total?



- 6) a. How many groups of 100 are there?
b. How many small blocks are there total?



- 7) a. How many groups of 100 are there?
b. How many small blocks are there total?



Answers

1a. 4

1b. 400

2a. 5

2b. 500

3a. 1

3b. 100

4a. 8

4b. 800

5a. 9

5b. 900

6a. 2

6b. 200

7a. 3

7b. 300